





# RESOURCE WORLD

## GENERAL MENTAL ABILITY



**FREE**

# Non Verbal Reasoning - Part 4

**Book for Various Competitive Exams**

(Like KPSC technical Post C, KSRTC, PDO, RRB, SSC, FDDA, SDAA, PSI, PC, CET, etc..)





[www.amkresourceinfo.com](http://www.amkresourceinfo.com)



**Non Verbal Reasoning – Part 4**

**MIRROR IMAGES**

In each of the following questions you are given a combination of alphabets and/or numbers followed by four alternatives (1), (2), (3) and (4). Choose the alternative which is closely resembles the mirror image of the given combination.

1. Choose the alternative which is closely resembles the mirror image of the given combination.

ANS43Q12

- |              |              |
|--------------|--------------|
| (1) AN243Q12 | (2) 21Q342NA |
| (3) 2NA34Q21 | (4) 12Q43AN2 |

- |             |             |
|-------------|-------------|
| <b>A.</b> 1 | <b>B.</b> 2 |
| <b>C.</b> 3 | <b>D.</b> 4 |

**Answer:** Option **B**

2. Choose the alternative which is closely resembles the mirror image of the given combination.

TARA IN1014A

- |                           |                           |
|---------------------------|---------------------------|
| (1) ARA IN1014A           | (2) A I 0 1 4 N I A R A T |
| (3) A I 0 1 4 T A R A I N | (4) A I 0 1 4 N I A R A T |

- |             |             |
|-------------|-------------|
| <b>A.</b> 1 | <b>B.</b> 2 |
| <b>C.</b> 3 | <b>D.</b> 4 |

**Answer:** Option **D**

3. Choose the alternative which is closely resembles the mirror image of the given combination.

1965 INDOPAK

- |                 |                   |
|-----------------|-------------------|
| (1) KAPODI 1965 | (2) PAKI DODI 992 |
| (3) KAPODI 1992 | (4) KAPODI 1992   |

- |             |             |
|-------------|-------------|
| <b>A.</b> 1 | <b>B.</b> 2 |
|-------------|-------------|

**C.** 3

**D.** 4

**Answer:** Option **D**

4. Choose the alternative which is closely resembles the mirror image of the given combination.

**MALAYALAM**

- (1) MALAYALAM      (2) MAJAYAJAM  
 (3) MALAYALAM      (4) MAGAYAGAM

**A.** 1

**B.** 2

**C.** 3

**D.** 4

**Answer:** Option **B**

5. Choose the alternative which is closely resembles mirror image of given combination.

**EFFECTIVE**

- (1) EVITCEFFE      (2) EVITCEFFE  
 (3) EFFECTIVE      (4) EVITCEFFE

**A.** 1

**B.** 2

**C.** 3

**D.** 4

**Answer:** Option **A**

6. Choose the alternative which is closely resembles mirror image of given combination.

**UTZFY6KH**

- (1) HK9YJSTU      (2) ULZFY9KH  
 (3) HK9YJSTU      (4) HK9YJSTU

**A.** 1

**B.** 2

**C.** 3

**D.** 4

**Answer:** Option **D**

7. Choose the alternative which is closely resembles mirror image of given combination.

**AN54WMG3**

- (1) AN54WMG3      (2) AN54WMG3  
 (3) AN54WMG3      (4) AN54WMG3

**A.** 1

**B.** 2

**C.** 3

**D.** 4

**Answer:** Option **B**

8. Choose the alternative which is closely resembles the mirror image of the given combination.

**SUPERVISOR**

- (1) ROSIVREPU\$ (2) SUBEVLISOB  
(3) #20N#2EBIV (4) SUBEVLIO2B

- A.** 1 **B.** 2  
**C.** 3 **D.** 4

**Answer:** Option **A**

9. Choose the alternative which is closely resembles the mirror image of the given combination.

**MAGAZINE**

- (1) MAAZINE (2) ENIZAGAM  
(3) MAAZINE (4) ENIZAGAM

- A.** 1 **B.** 2  
**C.** 3 **D.** 4

**Answer:** Option **D**

10. Choose the alternative which is closely resembles mirror image of given combination.

**DL9CG4728**

- (1) DJ8CG4728 (2) 8274CG4728  
(3) 8274CG4728 (4) 8274CG4728

- A.** 1 **B.** 2  
**C.** 3 **D.** 4

**Answer:** Option **C**

11. Choose the alternative which is closely resembles the mirror image of the given combination.

**247596**

- (1) 695742 (2) 695742  
(3) 247596 (4) 247596

- A.** 1 **B.** 2  
**C.** 3 **D.** 4

**Answer:** Option **D**

12. Choose the alternative which is closely resembles mirror image of given combination.

**BR4AQ16HI**

- (1) BR4AQ16HI (2) IH61QA4RB  
 (3) IH61QA4RB (4) IH91QA4RB

- A.** 1 **B.** 2  
**C.** 3 **D.** 4

**Answer:** Option **A**

13. Choose the alternative which is closely resembles the mirror image of the given combination.

**GEOGRAPHY**

- (1) YHPARGOEG (2) YHPARGOEG  
 (3) YHPARGOEG (4) YHPARGOEG

- A.** 1 **B.** 2  
**C.** 3 **D.** 4

**Answer:** Option **A**

14. Choose the alternative which is closely resembles mirror image of given combination.

**NATIONAL**

- (1) LANOITAN (2) LANOITAN  
 (3) LANOITAN (4) LANOITAN

- A.** 1 **B.** 2  
**C.** 3 **D.** 4

**Answer:** Option **B**

15. Choose the alternative which is closely resembles mirror image of given combination.

**PAINTED**

- (1) PAINTED (2) PAINTED  
 (3) PAINTED (4) PAINTED

- A.** 1 **B.** 2  
**C.** 3 **D.** 4

**Answer:** Option **B**

16. Choose the alternative which is closely resembles the mirror image of the given combination.

qutubgarh

- (1) puʃudgǝrh (2) dnʃnpǝrɥ  
(3) hragbutuq (4) hɹǝpɔʃurp

- A.** 1 **B.** 2  
**C.** 3 **D.** 4

**Answer:** Option **D**

17. Choose the alternative which is closely resembles the mirror image of the given combination.

JUDGEMENT

- (1) TNEMEGDUJ (2) TŦEMEGDUJ  
(3) TŦEMEGDUJ (4) TNEMEGDUJ

- A.** 1 **B.** 2  
**C.** 3 **D.** 4

**Answer:** Option **C**

18. Choose the alternative which is closely resembles mirror image of given combination.

REASONING

- (1) REYSONING (2) GNINOSAEŦ  
(3) REASONING (4) GNINOSAEŦ

- A.** 1 **B.** 2  
**C.** 3 **D.** 4

**Answer:** Option **B**

19. Choose the alternative which is closely resembles mirror image of given combination.

QUALITY

- (1) QNALTY (2) YTILAUQ  
(3) YTIJAUQ (4) YTIJAUQ

- A.** 1 **B.** 2  
**C.** 3 **D.** 4

**Answer:** Option **C**

20. Choose the alternative which is closely resembles the mirror image of the given combination.

**Nu56p7uR**

(1) **ИuǝθqʌuЯ**

(2) **ЯnʌqθǝnИ**

(3) **ЯuʌqθǝИ**

(4) **ИǝpʌuЯ**

**A. 1**

**B. 2**

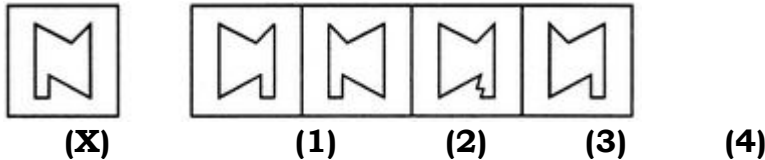
**C. 3**

**D. 4**

**Answer: Option C**

In each of the following questions, choose the correct mirror images of the given image of the Fig.(X) from amongst the four alternatives (1), (2), (3) and (4) given along with it.

1. Choose the correct mirror image of the given figure (X) from amongst the four alternatives.



**A. 1**

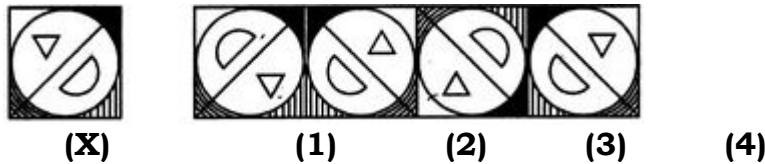
**B. 2**

**C. 3**

**D. 4**

**Answer: Option D**

2. Choose the correct mirror image of the given figure (X) from amongst the four alternatives.



**A. 1**

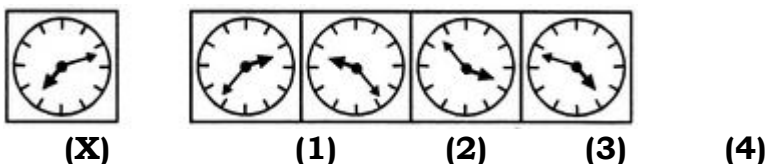
**B. 2**

**C. 3**

**D. 4**

**Answer: Option D**

3. Choose the correct mirror image of the given figure (X) from amongst the four alternatives.



**A. 1**

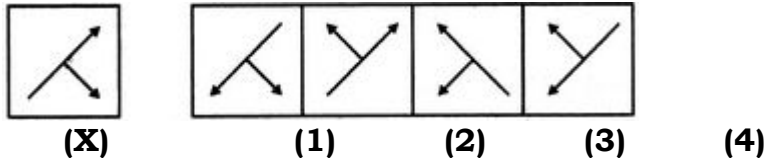
**B. 2**

**C. 3**

**D. 4**

**Answer: Option D**

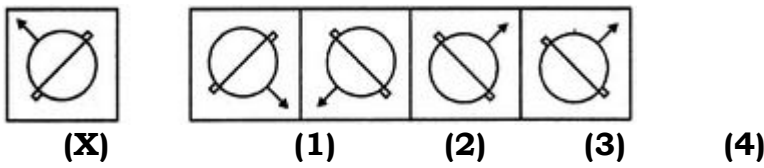
4. Choose correct mirror image of given figure (X) from amongst the four alternatives.



- A. 1
- B. 2
- C. 3
- D. 4

**Answer:** Option C

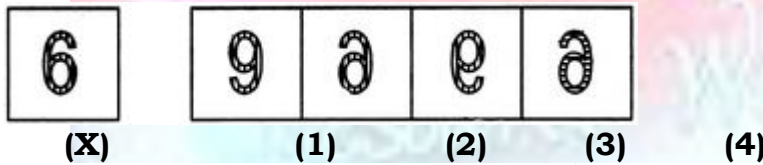
5. Choose correct mirror image of given figure (X) from amongst the four alternatives.



- A. 1
- B. 2
- C. 3
- D. 4

**Answer:** Option C

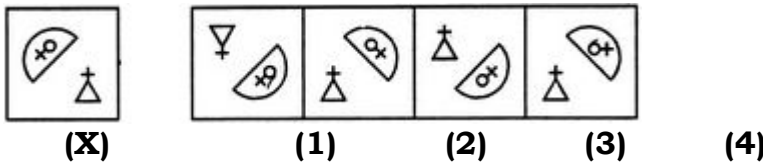
6. Choose the correct mirror image of the given figure (X) from amongst the four alternatives.



- A. 1
- B. 2
- C. 3
- D. 4

**Answer:** Option B

7. Choose the correct mirror image of the given figure (X) from amongst the four alternatives.

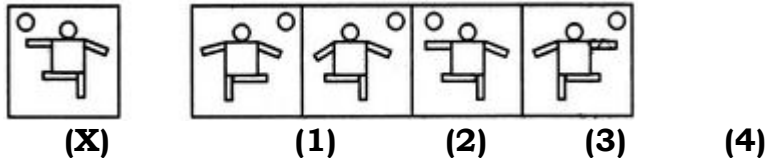


- A. 1
- B. 2
- C. 3
- D. 4

**Answer:** Option B



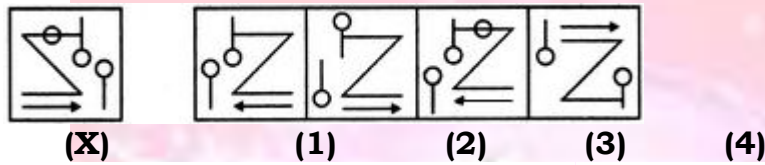
8. Choose correct mirror image of given figure (X) from amongst the four alternatives.



- |             |             |
|-------------|-------------|
| <b>A.</b> 1 | <b>B.</b> 2 |
| <b>C.</b> 3 | <b>D.</b> 4 |

**Answer:** Option **D**

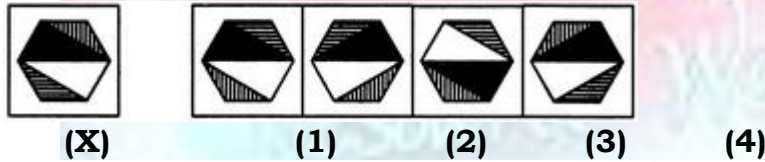
9. Choose the correct mirror image of the given figure (X) from amongst the four alternatives.



- |             |             |
|-------------|-------------|
| <b>A.</b> 1 | <b>B.</b> 2 |
| <b>C.</b> 3 | <b>D.</b> 4 |

**Answer:** Option **C**

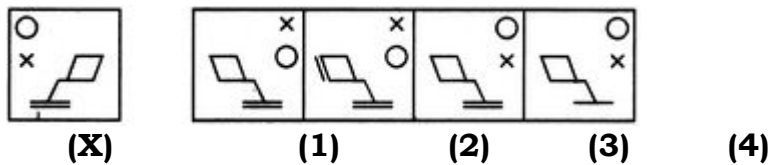
10. Choose correct mirror image of given figure (X) from amongst the four alternatives.



- |             |             |
|-------------|-------------|
| <b>A.</b> 1 | <b>B.</b> 2 |
| <b>C.</b> 3 | <b>D.</b> 4 |

**Answer:** Option **D**

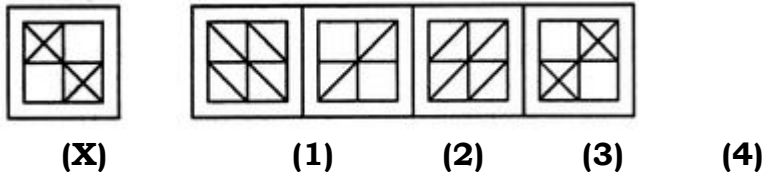
11. Choose correct mirror image of given figure (X) from amongst the four alternatives.



- |             |             |
|-------------|-------------|
| <b>A.</b> 1 | <b>B.</b> 2 |
| <b>C.</b> 3 | <b>D.</b> 4 |

**Answer:** Option **C**

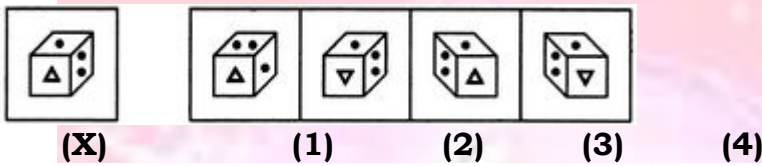
12. Choose the correct mirror image of the given figure (X) from amongst the four alternatives.



- |             |            |            |             |            |
|-------------|------------|------------|-------------|------------|
| <b>(X)</b>  | <b>(1)</b> | <b>(2)</b> | <b>(3)</b>  | <b>(4)</b> |
| <b>A.</b> 1 |            |            | <b>B.</b> 2 |            |
| <b>C.</b> 3 |            |            | <b>D.</b> 4 |            |

**Answer:** Option **D**

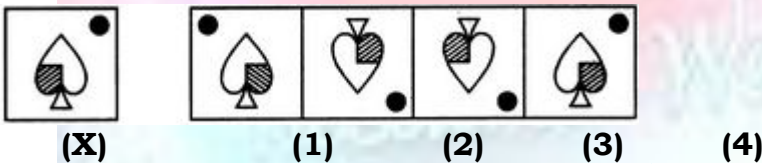
13. Choose correct mirror image of given figure (X) from amongst the four alternatives.



- |             |            |            |             |            |
|-------------|------------|------------|-------------|------------|
| <b>(X)</b>  | <b>(1)</b> | <b>(2)</b> | <b>(3)</b>  | <b>(4)</b> |
| <b>A.</b> 1 |            |            | <b>B.</b> 2 |            |
| <b>C.</b> 3 |            |            | <b>D.</b> 4 |            |

**Answer:** Option **C**

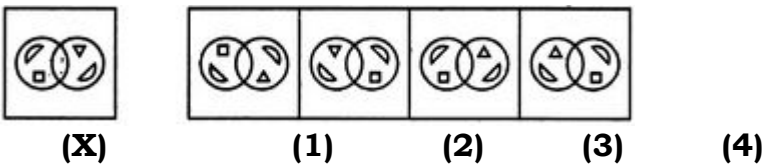
14. Choose the correct mirror image of the given figure (X) from amongst the four alternatives.



- |             |            |            |             |            |
|-------------|------------|------------|-------------|------------|
| <b>(X)</b>  | <b>(1)</b> | <b>(2)</b> | <b>(3)</b>  | <b>(4)</b> |
| <b>A.</b> 1 |            |            | <b>B.</b> 2 |            |
| <b>C.</b> 3 |            |            | <b>D.</b> 4 |            |

**Answer:** Option **A**

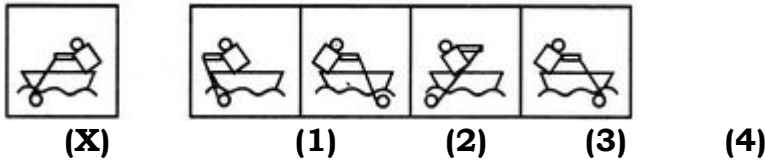
15. Choose the correct mirror image of the given figure (X) from amongst the four alternatives.



- |             |            |            |             |            |
|-------------|------------|------------|-------------|------------|
| <b>(X)</b>  | <b>(1)</b> | <b>(2)</b> | <b>(3)</b>  | <b>(4)</b> |
| <b>A.</b> 1 |            |            | <b>B.</b> 2 |            |
| <b>C.</b> 3 |            |            | <b>D.</b> 4 |            |

**Answer:** Option **B**

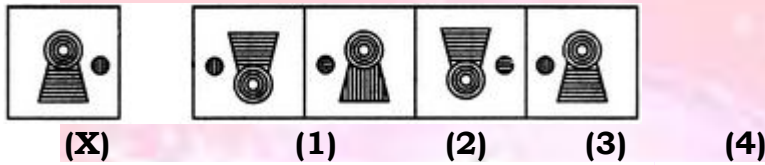
16. Choose correct mirror image of given figure (X) from amongst the four alternatives.



- A. 1                                      B. 2  
C. 3                                      D. 4

**Answer:** Option D

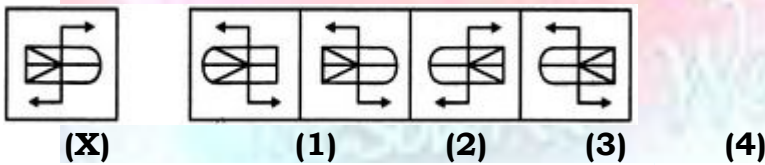
17. Choose correct mirror image of given figure (X) from amongst the four alternatives.



- A. 1                                      B. 2  
C. 3                                      D. 4

**Answer:** Option D

18. Choose correct mirror image of given figure (X) from amongst the four alternatives.



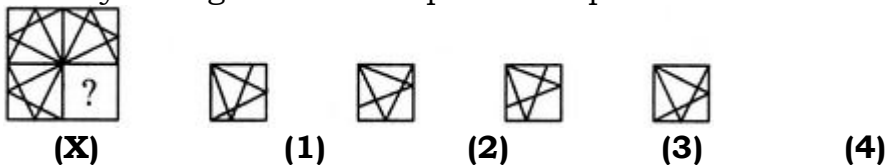
- A. 1                                      B. 2  
C. 3                                      D. 4

**Answer:** Option D

**PATTERN COMPLETION**

In each of the following questions, select a figure from amongst the four alternatives, which when placed in the blank space of figure (X) would complete the pattern.

1. Identify the figure that completes the pattern.



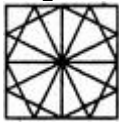
- A. 1                                      B. 2

C. 3

D. 4

**Answer:** Option D

**Explanation:**



2. Identify the figure that completes the pattern.



(X)



(1)



(2)



(3)

(4)

A. 1

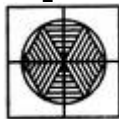
B. 2

C. 3

D. 4

**Answer:** Option C

**Explanation:**



3. Identify the figure that completes the pattern.



(X)



(1)



(2)



(3)

(4)

A. 1

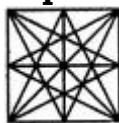
B. 2

C. 3

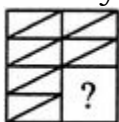
D. 4

**Answer:** Option D

**Explanation:**



4. Identify the figure that completes the pattern.



(X)



(1)



(2)



(3)

(4)

A. 1


B. 2

C. 3

D. 4

**Answer:** Option D

**Explanation:**



5. Identify the figure that completes the pattern.



(X)



(1)



(2)



(3)

(4)

A. 1


B. 2

C. 3

D. 4

**Answer:** Option B

**Explanation:**



6. Identify the figure that completes the pattern.



(X)



(1)



(2)



(3)

(4)

A. 1

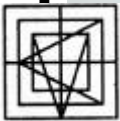
B. 2

C. 3

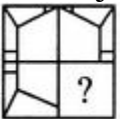
D. 4

**Answer:** Option D

**Explanation:**



7. Identify the figure that completes the pattern.



(X)



(1)



(2)



(3)

(4)

A. 1

B. 2

C. 3

D. 4

**Answer:** Option D

**Explanation:**



8. Identify the figure that completes the pattern.



(X)



(1)



(2)



(3)

(4)

A. 1

B. 2

C. 3

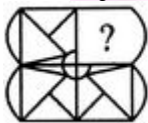
D. 4

**Answer:** Option D

**Explanation:**



9. Identify the figure that completes the pattern.



(X)



(1)



(2)



(3)

(4)

A. 1

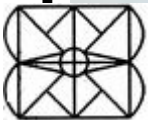
B. 2

C. 3

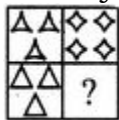
D. 4

**Answer:** Option D

**Explanation:**



10. Identify the figure that completes the pattern.



(X)



(1)



(2)



(3)

(4)

A. 1


B. 2

C. 3

D. 4

**Answer:** Option D

**Explanation:**



11. Identify the figure that completes the pattern.



(X)



(1)



(2)



(3)

(4)

A. 1

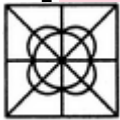
B. 2

C. 3

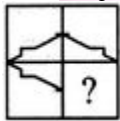
D. 4

**Answer:** Option C

**Explanation:**



12. Identify the figure that completes the pattern.



(X)



(1)



(2)



(3)

(4)

A. 1

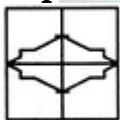
B. 2

C. 3

D. 4

**Answer:** Option D

**Explanation:**



13. Identify the figure that completes the pattern.



(X)



(1)



(2)



(3)

(4)

A. 1

B. 2

C. 3

D. 4

**Answer:** Option D

**Explanation:**



14. Identify the figure that completes the pattern.



(X)



(1)



(2)



(3)

(4)

A. 1

B. 2

C. 3

D. 4

**Answer:** Option D

**Explanation:**



15. Identify the figure that completes the pattern.



(X)



(1)



(2)



(3)

(4)

A. 1

B. 2

C. 3

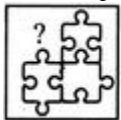
D. 4

**Answer:** Option D

**Explanation:**



16. Identify the figure that completes the pattern.



(X)



(1)



(2)



(3)

(4)

A. 1

B. 2

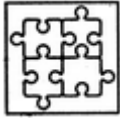
C. 3

D. 4

**Answer:** Option B

**Explanation:**





17. Identify the figure that completes the pattern.



(X)



(1)



(2)



(3)

(4)

A. 1

B. 2

C. 3

D. 4

**Answer:** Option D

**Explanation:**



18. Identify the figure that completes the pattern.



(X)



(1)



(2)



(3)

(4)

A. 1

B. 2

C. 3

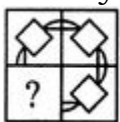
D. 4

**Answer:** Option B

**Explanation:**



19. Identify the figure that completes the pattern.



(X)



(1)



(2)



(3)

(4)

A. 1

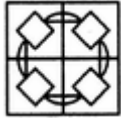
B. 2

C. 3

D. 4

**Answer:** Option B

**Explanation:**



20. Identify the figure that completes the pattern.



(X)



(1)



(2)



(3)

(4)

A. 1

B. 2

C. 3

D. 4

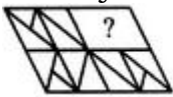
**Answer:** Option B

**Explanation:**



In each of the following questions, select a figure from amongst the four alternatives, which when placed in the blank space of figure (X) would complete the pattern.

1. Identify the figure that completes the pattern.



(X)



(1)



(2)



(3)

(4)

A. 1

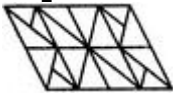
B. 2

C. 3

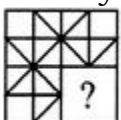
D. 4

**Answer:** Option B

**Explanation:**



2. Identify the figure that completes the pattern.



(X)



(1)



(2)



(3)

(4)

A. 1

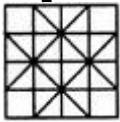
B. 2

C. 3

D. 4

**Answer:** Option B

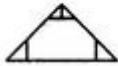
**Explanation:**



3. Identify the figure that completes the pattern.



(X)



(1)



(2)



(3)



(4)

A. 1

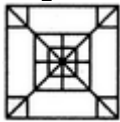
B. 2

C. 3

D. 4

**Answer:** Option D

**Explanation:**



4. Identify the figure that completes the pattern.



(X)



(1)



(2)



(3)



(4)

A. 1

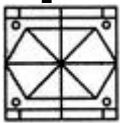
B. 2

C. 3

D. 4

**Answer:** Option B

**Explanation:**



5. Identify the figure that completes the pattern.



(X)



(1)



(2)



(3)



(4)

A. 1

B. 2

C. 3

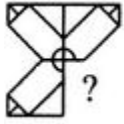
D. 4

**Answer:** Option D

**Explanation:**



6. Identify the figure that completes the pattern.



(X)



(1)



(2)



(3)

(4)

A. 1

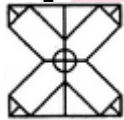
B. 2

C. 3

D. 4

**Answer:** Option C

**Explanation:**



7. Identify the figure that completes the pattern.



(X)



(1)



(2)



(3)

(4)

A. 1

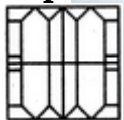
B. 2

C. 3

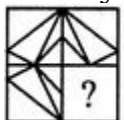
D. 4

**Answer:** Option C

**Explanation:**



8. Identify the figure that completes the pattern.



(X)



(1)



(2)



(3)

(4)

A. 1

B. 2

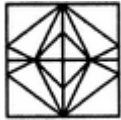
C. 3

D. 4

**Answer:** Option C

**Explanation:**





9. Identify the figure that completes the pattern.



(X)



(1)



(2)



(3)

(4)

A. 1

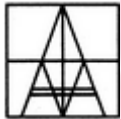
B. 2

C. 3

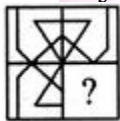
D. 4

**Answer:** Option C

**Explanation:**



10. Identify the figure that completes the pattern.



(X)



(1)



(2)



(3)

(4)

A. 1

B. 2

C. 3

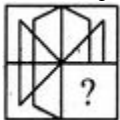
D. 4

**Answer:** Option C

**Explanation:**



11. Identify the figure that completes the pattern.



(X)



(1)



(2)



(3)

(4)

A. 1

B. 2

C. 3

D. 4

**Answer:** Option C

**Explanation:**



12. Identify the figure that completes the pattern.



(X)



(1)



(2)



(3)

(4)

A. 1

B. 2

C. 3


D. 4

**Answer:** Option C

**Explanation:**



13. Identify the figure that completes the pattern.



(X)



(1)



(2)



(3)

(4)

A. 1

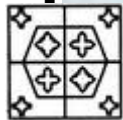
B. 2

C. 3


D. 4

**Answer:** Option B

**Explanation:**



Visit our Website



-----JOIN US by CLICK here-----



### Important Links in our Website

#### A M K – Free E Resources

<http://amkresourceinfo.com/free-e-resources/>

Daily Newspapers : <http://amkresourceinfo.com/daily-newspapers/>

Job Notifications : <http://amkresourceinfo.com/job-notifications/>

E Books : <http://amkresourceinfo.com/e-books-2/>

E Magazines : <http://amkresourceinfo.com/e-magazines-2/>

Online Buy Books : <http://amkresourceinfo.com/online-buy-books/>

RRB – Group D : <http://amkresourceinfo.com/rrb-group-d/>

And many more...

**Keep visiting for more updates**

**“Your Success, Our Motto”**